






# Watermelon - A Slice of Fun!

Math Grades 1-2

- Jan had 12 watermelon  s.  
Tom had 24 watermelon  s.  
Andrea had 7 watermelon  s.  
Who had the most seeds? \_\_\_\_\_

- Jim picked 32 watermelons.   
Mary picked 10 watermelons.  
Nick picked 21 watermelons.  
Who picked the least? \_\_\_\_\_


- Carl planted 2 watermelon plants.   
Rose planted 3 watermelon plants.  
A.J. planted 11 watermelon plants.  
Who planted the most? \_\_\_\_\_  
Who planted the least? \_\_\_\_\_

## Fun Facts!

According to the Guinness Book of World Records, the largest watermelon ever grown was 262 pounds!

The first recorded watermelon harvested was 5,000 years ago.

There are over 200 varieties of watermelon grown in the United States.



Pinky would like to buy a slice of watermelon. It costs 45¢.

- Count the money.
- Write each amount.
- Circle the amount of money Pinky needs.



J. Slice has a watermelon stand. Color a space in the graph to show how many of each kind of watermelon is in the stand.


Solve the subtraction problems. Use the code to find the matching letter for each answer. Write letters on lines below.

Code	3	8	6	5	7	4	1	2	Code
	D	L	S	I	U	E	C	O	

WATERMELON IS \_\_\_\_\_

7	10	9	6	5	10	4	8	9
-4	-6	-1	-1	-4	-5	-2	-1	-3
_____	_____	_____	_____	_____	_____	_____	_____	_____

_____	_____	_____	_____	_____	_____	_____	_____	_____
-------	-------	-------	-------	-------	-------	-------	-------	-------

 = \_\_\_\_\_




 = \_\_\_\_\_




 = \_\_\_\_\_

12				
11				
10				
9				
8				
7				
6				
5				
4				
3				
2				
1				
	Seeded	Mini-melons	Seedless	Yellow Flesh