

Watermelons Add Up To LOTS of Fun!

Math Grades 3-4

Solve the problems. Then look for your answers in the chart. Fill in the numbered spaces below with the letters that go with your answers. Answer the question.

1. $\begin{array}{r} 345 \\ -221 \\ \hline \end{array}$

2. $\begin{array}{r} 836 \\ -338 \\ \hline \end{array}$

3. $\begin{array}{r} 250 \\ +156 \\ \hline \end{array}$

4. $\begin{array}{r} 765 \\ -542 \\ \hline \end{array}$

5. $\begin{array}{r} 832 \\ -659 \\ \hline \end{array}$

6. $\begin{array}{r} 162 \\ +135 \\ \hline \end{array}$

7. $\begin{array}{r} 298 \\ -101 \\ \hline \end{array}$

8. $\begin{array}{r} 236 \\ +165 \\ \hline \end{array}$

401	498	223	297	406	197	173	124
E	J	B	L	U	E	I	A

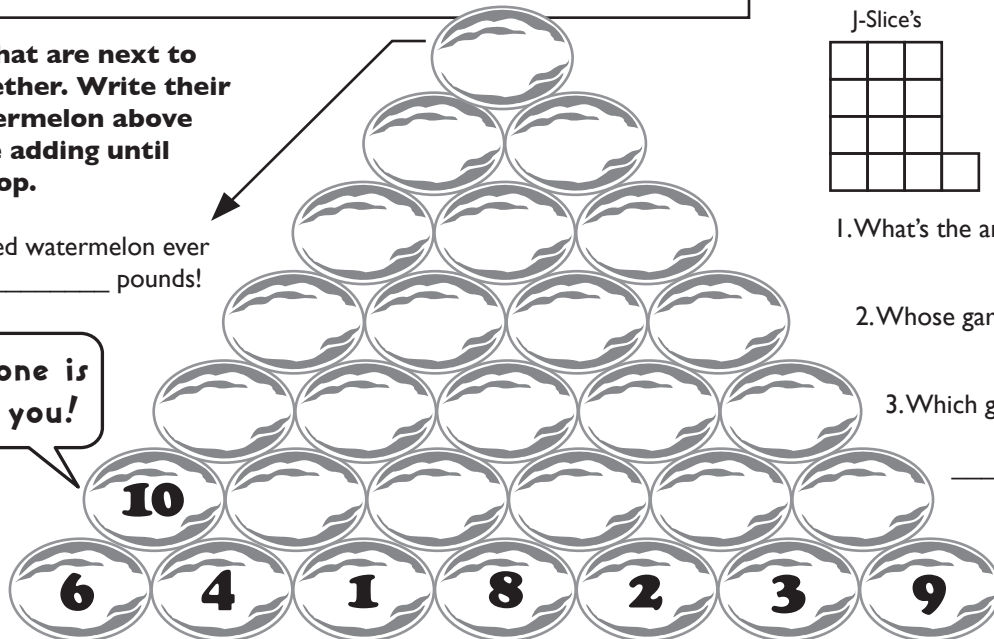
What is Pinky's favorite kind of watermelon?

1 2 3 4 5 6 7 8

Add numbers that are next to each other together. Write their sum in the watermelon above them. Continue adding until you reach the top.

The largest recorded watermelon ever grown weighed _____ pounds!

The first one is done for you!



1. $\begin{array}{r} 5 \\ 12 \\ -4 \\ 12 \\ \hline \end{array}$

2. $\begin{array}{r} 8 \\ 9 \\ -6 \\ 9 \\ \hline \end{array}$

3. $\begin{array}{r} 15 \\ 17 \\ -12 \\ 17 \\ \hline \end{array}$

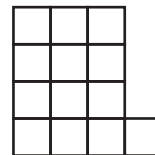
4. $\begin{array}{r} 13 \\ 18 \\ -6 \\ 18 \\ \hline \end{array}$

5. $\begin{array}{r} 4 \\ 5 \\ -2 \\ 5 \\ \hline \end{array}$



J. Slice and his friends have small gardens. Find the area of each garden by adding the number of square feet. Answer the questions.

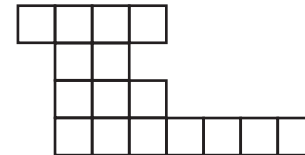
J-Slice's



Erin's



Matt's



1. What's the area of J. Slice's garden? _____

2. Whose garden has the largest area? _____

3. Which garden has the least amount of square feet? _____

